


Intervalle D2: Schreiben und Bestimmen (2)

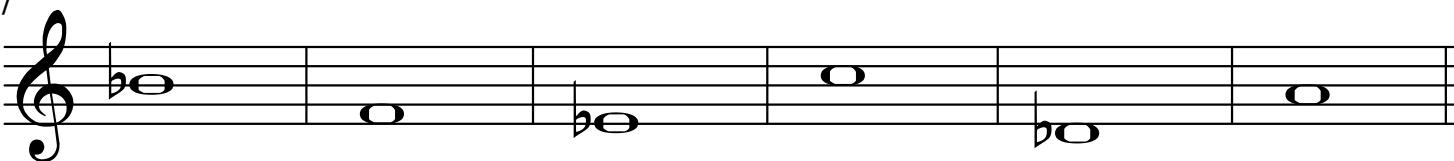
Schreibe verminderte Sekunden aufwärts (0 Halbtöne), zuerst grob, dann fein

1



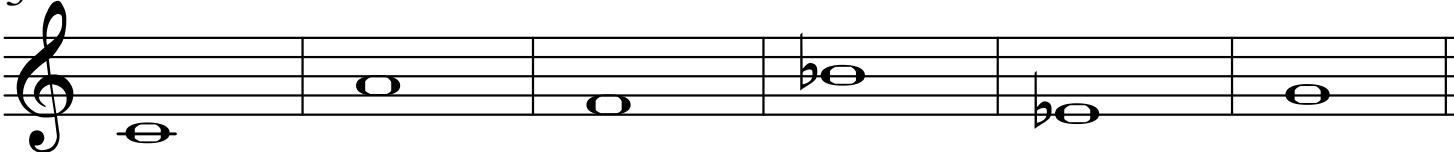
Verminderte Sekunden abwärts

7




Schreibe übermäßige Sekunden aufwärts (3 Halbtöne)

13




Übermäßige Sekunden abwärts

19



Bestimme die Intervalle

25



2 / Intervalle D2: Schreiben und Bestimmen (2)

Schreibe verminderte Terzen aufwärts (2 Halbtöne)

31

A musical staff in treble clef with six measures. The notes are: G4 (quarter), A4 (quarter), Bb4 (quarter), C5 (quarter), D5 (quarter), E5 (quarter). Each note is a diminished third above the previous one.

Verminderte Terzen abwärts

37

A musical staff in treble clef with six measures. The notes are: G4 (quarter), F4 (quarter), Eb4 (quarter), D4 (quarter), C4 (quarter), B3 (quarter). Each note is a diminished third below the previous one.

Übermäßige Terzen aufwärts (5 Halbtöne)

43

A musical staff in treble clef with six measures. The notes are: G4 (quarter), Bb4 (quarter), C5 (quarter), D5 (quarter), F5 (quarter), G5 (quarter). Each note is an augmented third above the previous one.

Übermäßige Terzen abwärts

49

A musical staff in treble clef with six measures. The notes are: G4 (quarter), Eb4 (quarter), D4 (quarter), C4 (quarter), Bb3 (quarter), Ab3 (quarter). Each note is an augmented third below the previous one.

Bestimme die Intervalle

55

A musical staff in treble clef with six measures. Each measure contains two notes: G4 and A4, G4 and Bb4, G4 and C5, G4 and D5, G4 and E5, G4 and F5.